

Worksheet I

Name and surname:

Form: Date:

WHAT CHARACTERISES ANIMALS?

A Write True (T) or False (F) next to each of the following statements:

- a) Animals are prokaryotic and multicellular organisms.
- b) Animals have organs and systems in order to perform their vital functions.
- c) Animals are autotrophs.
- d) Animals are heterotrophs.
- e) Animals are never omnivores.

B Write down whether the animal in the picture is a vertebrate or an invertebrate.



a) _____



b) _____



c) _____



d) _____



e) _____



f) _____

Worksheet II

Name and surname:

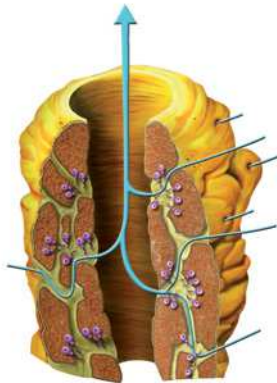
Form: Date:

REVISING THE PORIFERA AND THE CNIDARIA

A Match A to C with their definition(s).

a. Polyps	1. The walls of their bodies are perforated
b. Sponges	2. Their mouths are surrounded by tentacles
c. Medusae	3. They have spicules
	4. They are shaped like a bag
	5. Live floating in marine waters

B Write down the most important parts of the body of each of the animals in the following pictures.

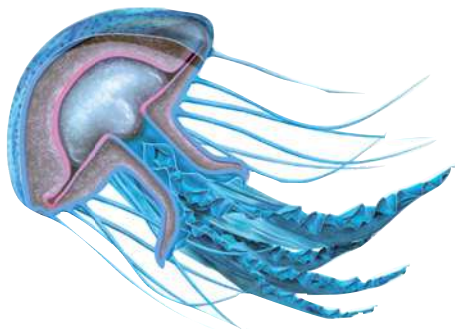


.....

.....

.....

.....



.....

.....

.....

.....

.....

Worksheet III

Name and surname:

Form: Date:

REVISING WORMS

A Write a sentence about worms using the following words:

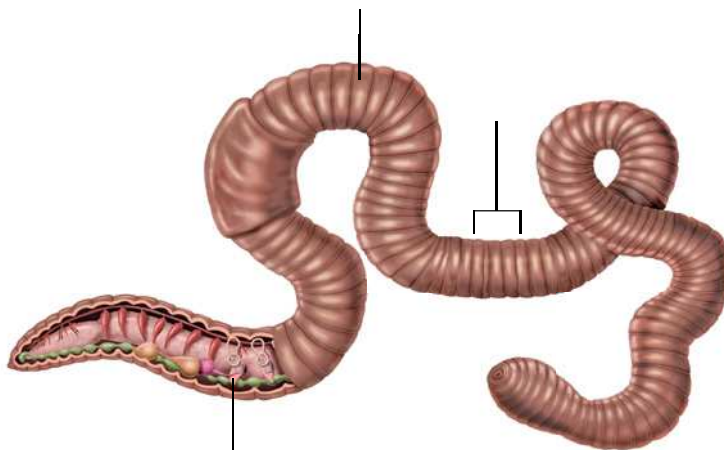
the, perforate, earthworms, soil, galleries, and, enrich.

.....
.....

B Fill in the blanks in the following sentences:

- a) Taenia has a flat
- b) The best known nematodes are, which live in people's
- c) Platyhelminthes live in..... environments .
- d) Annelids have a systems.

C Write down the name of the animal in the picture and the names of the parts indicated. Describe its body .



.....
.....
.....
.....

Worksheet IV

Name and surname:


Form: Date:

REVISING MOLLUSCS

A Write down the type of mollusc in each illustration below:



a) _____



b) _____



c) _____

B Complete the following chart:

Gastropods	They have a shell	They have a and foot.
Bivalves	Their shell has two	Their foot has the shape of an
Cephalopods	They have an internal	The foot has the shape of

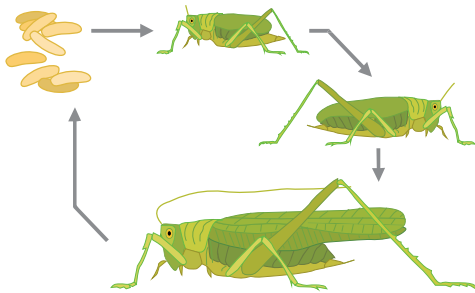
Worksheet V

Name and surname:

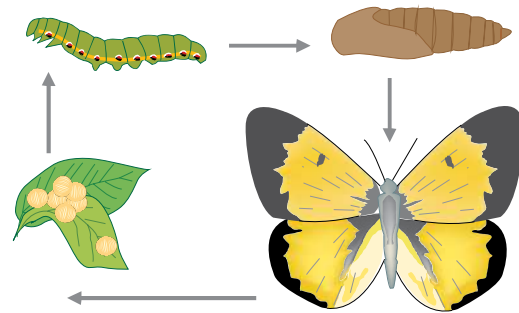
Form: Date:

REVISING ARTHROPODS

A What do the following diagrams represent? Then complete the illustrations by adding the missing names:



a) _____




b) _____

B To which type of arthropod does each of the following animals belong? Write down the parts its body is divided into:



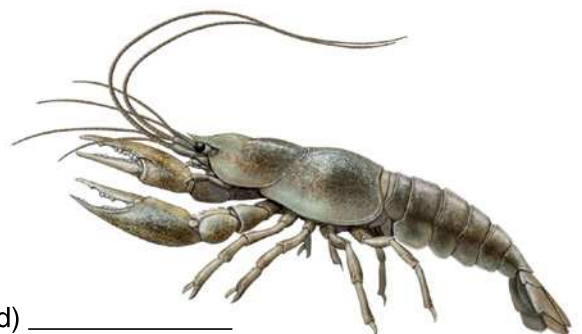
a) _____



b) _____



c) _____



d) _____

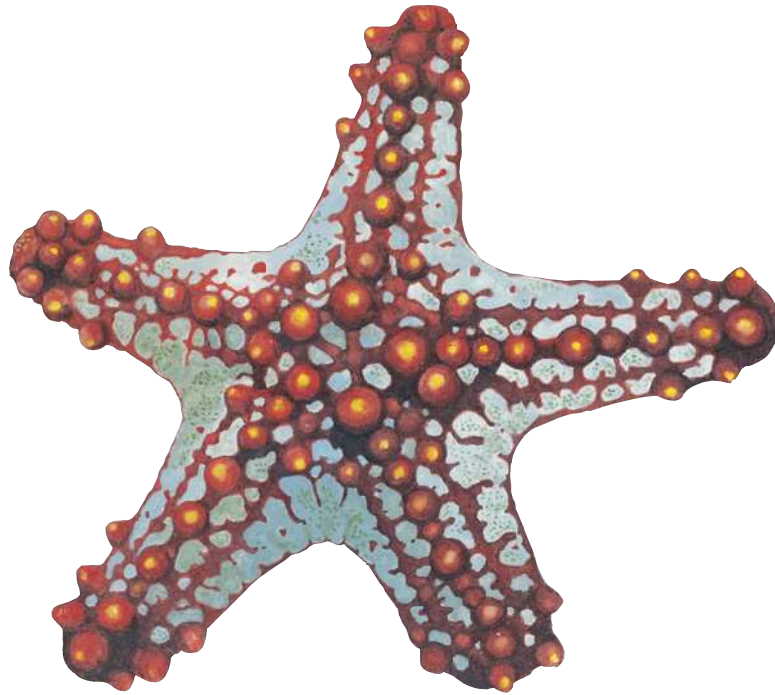
Worksheet VI

Name and surname:

Form: Date:

REVISING THE ECHINODERMS

A Look at the illustration and explain the main characteristics of this animal.



.....

.....

.....

.....

.....

.....

.....

.....

.....