

POLYGONS

Date: _____

Group: _____

Students: _____

1. Quiz:


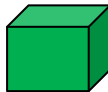
Now that you have learnt so much about polygons, solve this quiz,
but pay attention!

there could be more than one answer right or no one right:



1.1. Which of the next figures is not a polygon? Why?





1.2. Which of the next figures is not a polygon? Why?



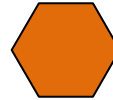

1.3. Which of the next figures is not a polygon? Why?



1.4. Which of the next polygons is a regular polygon? Why?



1.5. What are the names of the next regular polygons?



2. Examples:

Now draw your own examples.

3 sides polygon. What is its name?

4 sides polygon. What is its name?

4 sides regular polygon. What is its name?

5 sides polygon. What is its name?

6 sides polygon. What is its name?

8 sides polygon. What is its name?